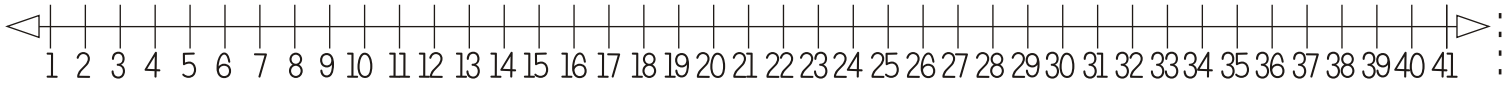


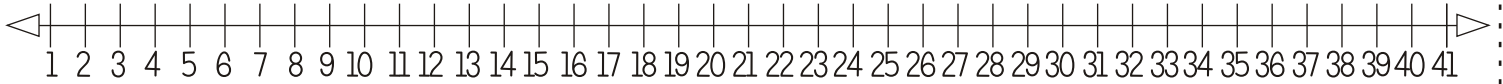
Esercitiamoci sulla linea dei numeri



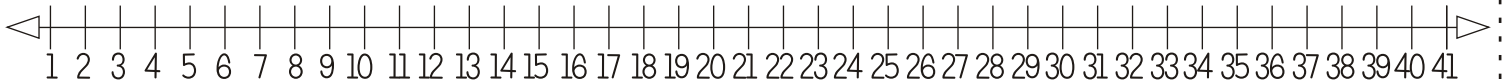
$14 + 8 = \dots\dots\dots$



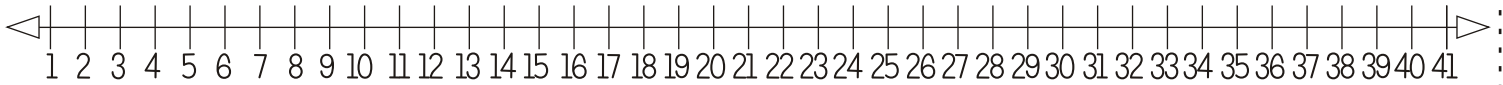
$17 + 6 = \dots\dots\dots$



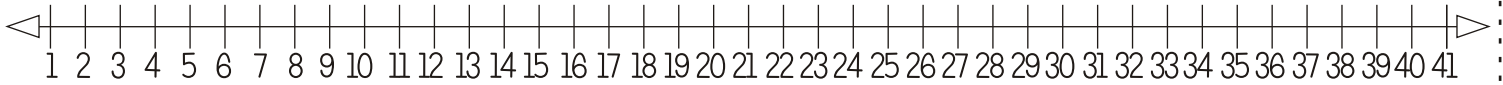
$24 + 10 = \dots\dots\dots$



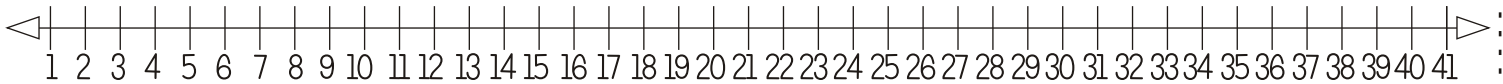
$13 + 11 = \dots\dots\dots$



$28 + 13 = \dots\dots\dots$



$30 + 11 = \dots\dots\dots$



$29 + 10 = \dots\dots\dots$

